

Based on NCF
for Foundational
Stage 2022 and
NIPUN BHARAT
2021

PMP Planet[®]
Multimedia Publishers
The Ultimate Resource

Skillment



Environmental Studies

A Multi-skill Activity Book on Environmental Studies



FS-3
UKG



ANSWER KEY

CONTENTS PAGE

ANSWER KEY (FS-3)

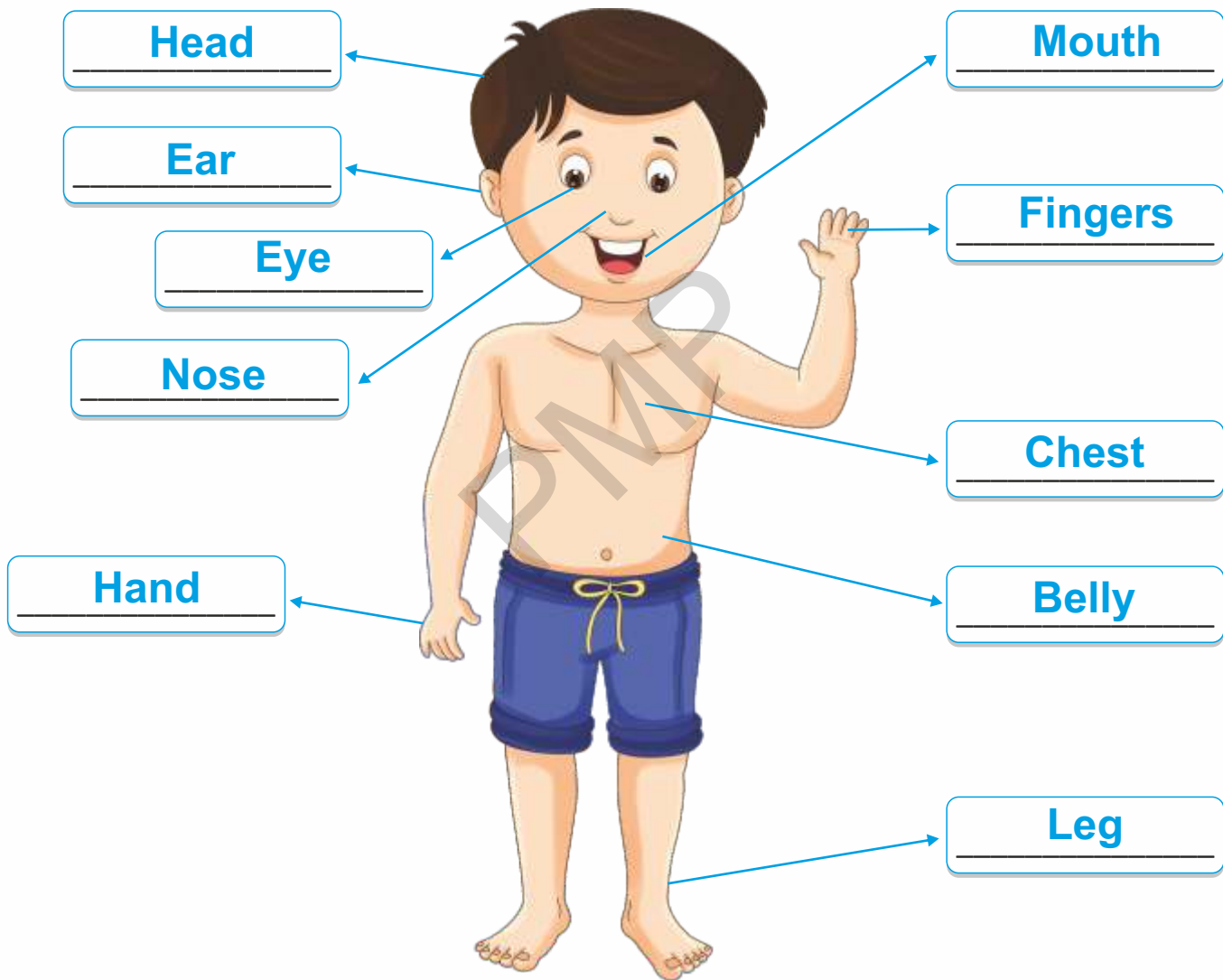
1.	Me and My Body	1
2.	My Senses	3
3.	My Safety	4
5.	Keeping Clean	5
6.	Ria's Birthday	5
7.	Good Manners	6
8.	Seasons	7
9.	Food We Eat	8
10.	Clothes	11
11.	House	12
13.	Air, Water and Fire	13
14.	Plants Around Us	14
15.	Animals	15
16.	Our Helpers	18
17.	Means of Transport	19
18.	Festivals	21

1

Me and My Body

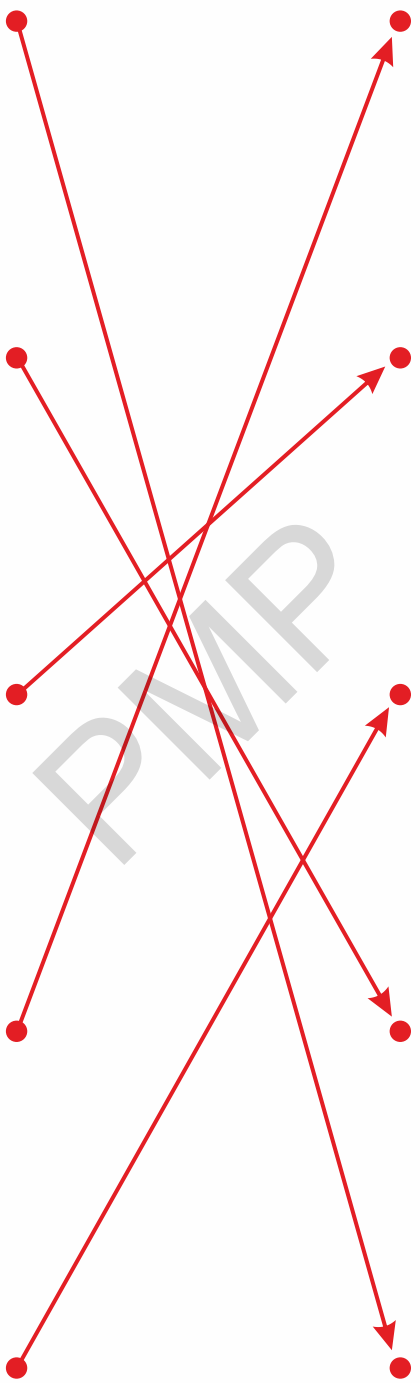
A. Do it yourself

B. Label the body parts using the Help Box.



- Head
- Ear
- Hand
- Leg
- Nose
- Fingers
- Chest
- Eye
- Mouth
- Belly


C. Match the activities with the body parts being used.



2

My Senses


A. Read what the genie is saying. Write the name of sense organ that you will use in each case in the given box.



How will you know the smell of marigold flower?

Sense organ

Nose



How will you tell the number of balls in my hand?

Sense organ


Eyes



How will you know the taste of sugar?

Sense organ

Tongue



How will you know if the cotton is soft or hard?

Sense organ

Skin



How will you listen to the spelling of cow?

Sense organ

Ears

B. Do it yourself

C. Do it yourself



3

My Safety

A. Cross out (X) the objects you should not play with.



B. Tick (✓) the activities which are safe and cross out (X) the rest.



C. Do it yourself





C. Do it yourself

PM


5

Keeping Clean

A. Do it yourself

B. Find the names of these things in the word maze and mark them.

C	P	M	K	L	S	D	S
V	D	S	V	B	H	R	P
C	O	M	B	R	A	X	V
M	D	G	C	M	M	P	K
P	K	B	F	M	P	Y	Z
S	D	L	G	S	O	A	P
N	Z	Y	C	L	O	B	X
D	K	M	B	K	T	D	V
T	O	W	E	L	P	C	W
B	R	P	K	M	D	S	U



6

Ria's Birthday

A. Do it yourself

B. Five

C. Do it yourself




7

Good Manners

A. Write what the children should say in the following situations.




Please



Sorry



Thank you



Welcome



8

Seasons

A. Look at the pictures and talk about them. Also, name the seasons.



B. Do it yourself




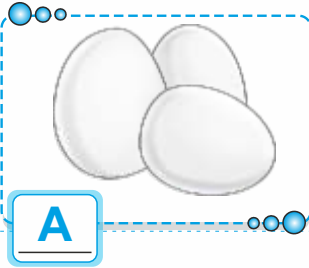

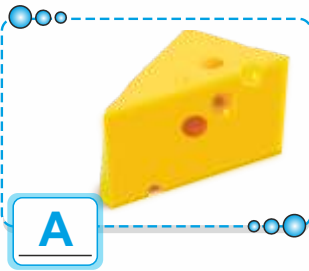

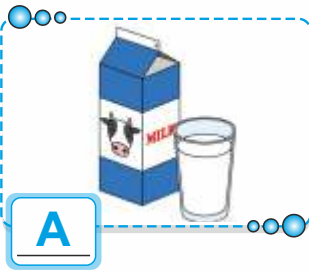
9

Food We Eat

A. Connect each food item to the correct basket.



B. Write P for the food items we get from plants and A for the ones we get from animals.



C. Help Ria reach her favourite fruit banana.



D. Colour the picture. Also, count the mangoes and write their number in the box.

Colour it yourself

Number of mangoes

10

Clothes

A. Match the clothes with the seasons.

Left column of clothes:

- Red sweater with white patterns
- Yellow raincoat
- Yellow shorts
- Yellow jacket
- Orange skirt
- Red boots

Right column of clothes:

- Red dress
- Orange beanie
- Colorful umbrella
- Yellow t-shirt
- Blue gloves

Central scenes:

- Beach scene (top)
- Boy by campfire (middle)
- Girl in rain (bottom)


B. Do it yourself



11

House

A. Draw lines to help these people reach the correct room. One has been done.



B. Find eight differences between these two houses and circle them in the second picture.



13

Air, Water and Fire

A. *Do it yourself*

B. Harjeet can fill a balloon in one minute. In how many minutes will he fill all these balloons?



6 Minutes

C. *Do it yourself*

D. *Do it yourself*



A. Colour the plant and label its parts.

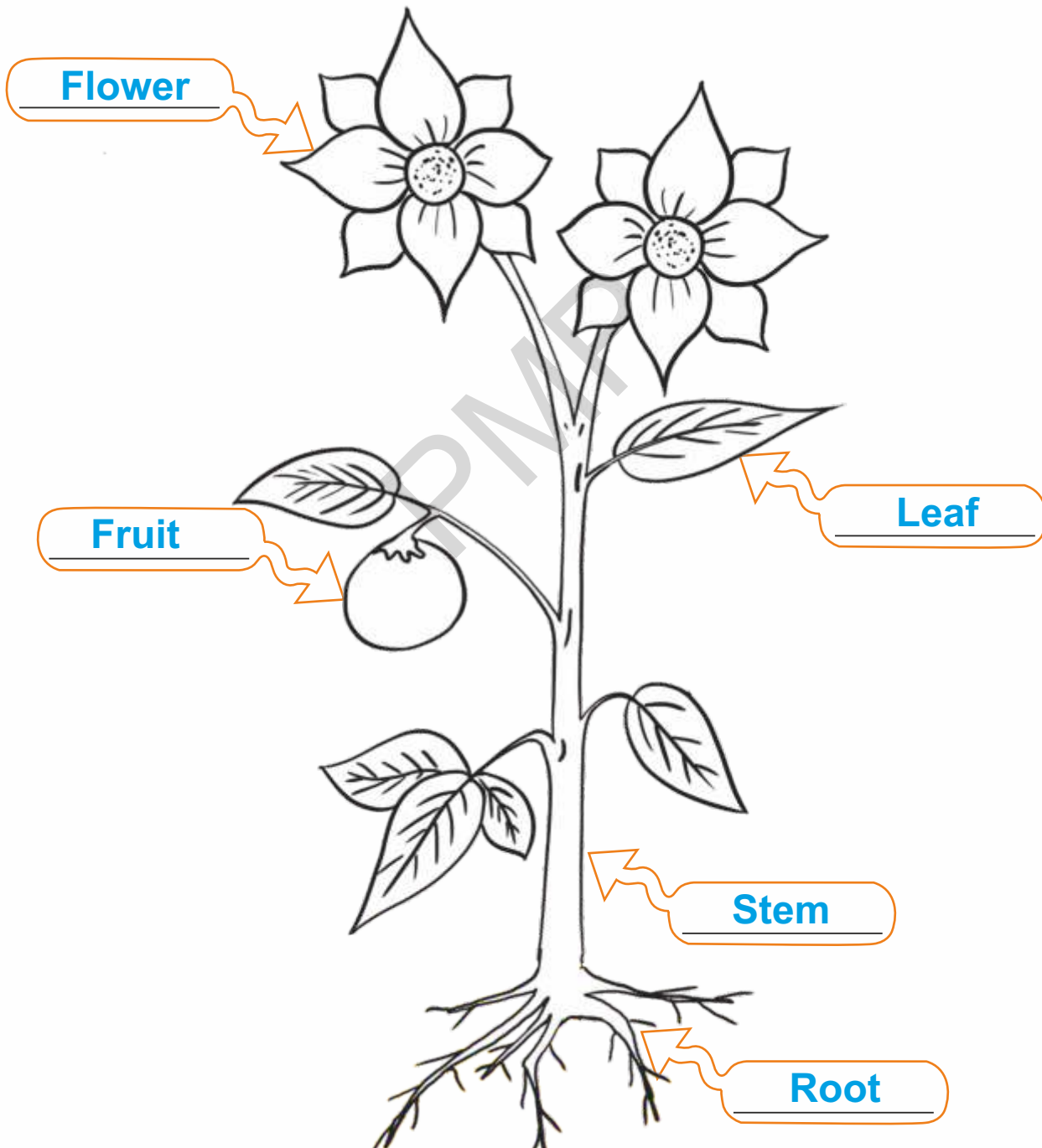
Root

Stem

Fruit

Leaf

Flower



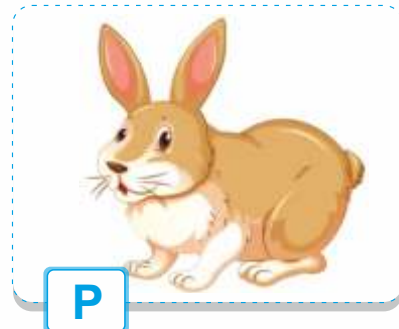


B. Do you know how to grow a plant from a seed? Arrange the following activities in order.






15

Animals

A. Write P for pets, D for domestic animals and W for wild animals.





D



B. Find the names of eight animals in the word grid and mark them.

P	K	E	D	V	B	R	M	G
D	R	L	I	O	N	K	G	D
S	B	E	V	C	K	L	M	C
R	C	P	B	T	I	G	E	R
L	O	H	S	O	H	O	K	M
Q	W	A	T	P	S	A	P	K
K	V	N	L	U	M	T	H	V
B	C	T	N	S	H	E	E	P
F	V	R	Q	B	D	V	P	D
Z	E	B	R	A	K	R	K	R

B. Colour it yourself

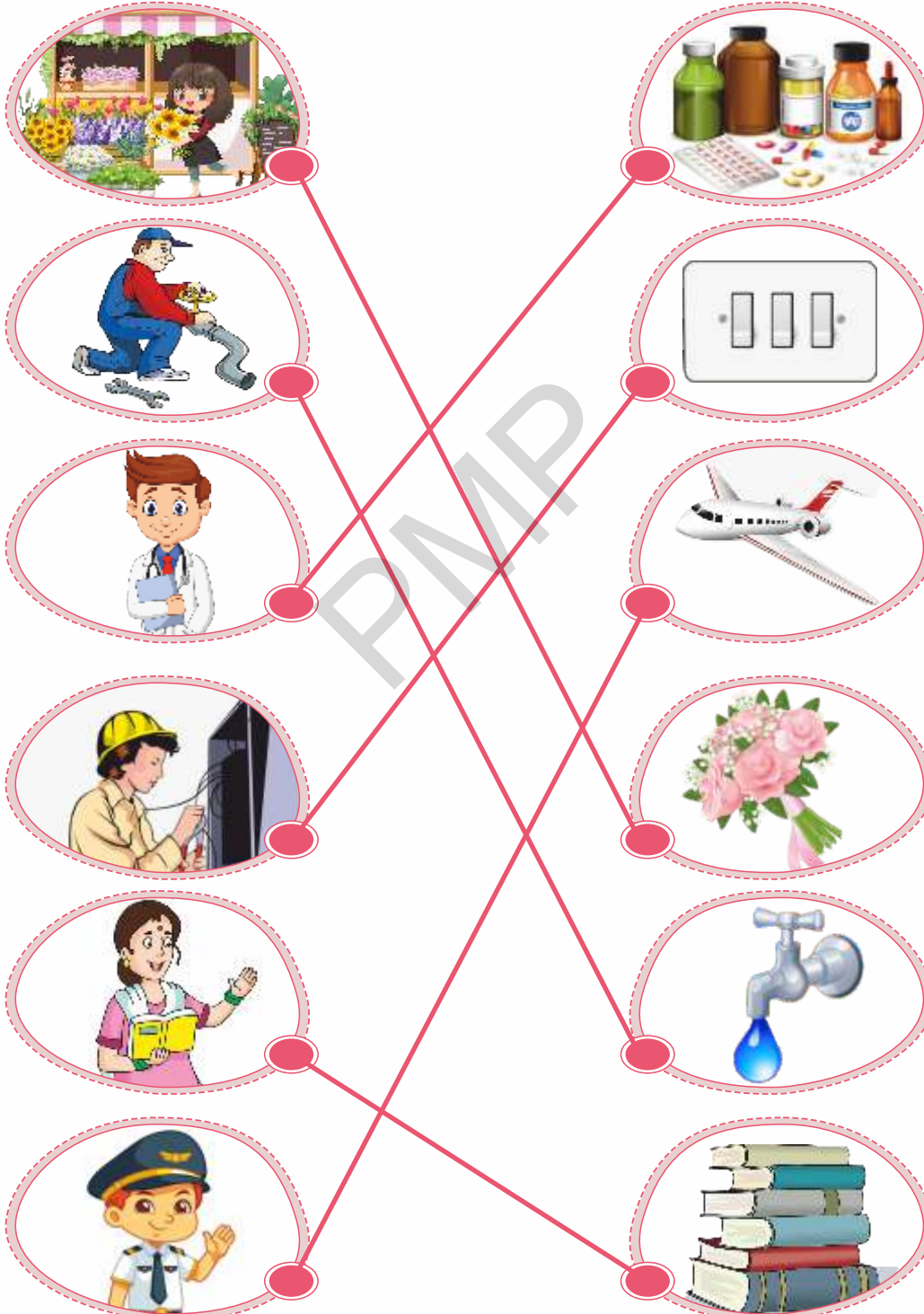
T U R T L E

PMP

16

Our Helpers

A. Match the pictures.



17

Means of Transport

A. Write L for land transport, A for air transport and W for water transport.



B. A bus was carrying 78 passengers. Twenty-six of them deboarded the bus at the next stop. How many passengers were left in the bus?

Number of passengers left in the bus = 52

C. Trace the path to help Rohit reach the shop.



18

Festivals

A. Write the names of festivals from the Help Box.

Eid
Onam
Pongal
Diwali
Christmas
Gurpurab



B. Join all the even numbers to help Rosy reach the gift box.

